

NSSNET-2023 – Sample Paper – INTELLIGENCE / REASONING

1. Roshan is moving towards south. He takes left turn and again takes left turn. In which direction he is moving now:-
(a) East (b) West
(c) North (d) South
2. Find the letter which is different from the rest: -
(a) a (b) e
(c) o (d) y
3. A man while working on alternate days earns Rs. 100 a day and spends Rs. 50 next day. In how many days will he achieve the target of earning Rs. 500/- :
(a) 16 (b) 17
(c) 18 (d) 20
4. In the number series 2, 6, 12, 20, 30, ____ what will come at '____' place:-
(a) 36 (b) 38
(c) 40 (d) 42
5. a, b, d, g, k, ____, what will come it '____' place:-
(a) m (b) n
(c) o (d) p
6. How many 25 paise coins will require to put in a bag for collecting total 5 rupees:-
(a) 20 (b) 30
(c) 40 (d) 50
7. Which of the following is most appropriate odd one form the rest three:
(a) Ostrich (b) Kiwi
(c) Penguin (d) Eagle
8. Which of the following no. is different than the other three nos. :-
(a) 17 (b) 39
(c) 57 (d) 93

NSSNET-2023 – Sample Paper – INTELLIGENCE / REASONING

9. Find the odd no. among the following four numbers :-
(a) 1 (b) 8
(c) 27 (d) 72
10. While driving towards East direction, a man turns 45° left. In which direction is he driving now: -
(a) North (b) South East
(c) North East (d) North West
11. A is B's sister. C is the B's mother. D is C's mother. How is D related to A:-
(a) Grandmother (b) Maternal Grandmother
(c) Aunt (d) Maternal Aunt
12. In a language COMPUTER is written as RFUVQNPC how will MOTER written in that language:-
(a) FUPNC (b) UFCNP
(c) CPNFU (d) UFNPC
13. Kitten: Cat :: ____: Lion
(a) Cub (b) puppy
(c) Foal (d) heifer
14. Free Kick: Football :: Smash : ?
(a) Badminton (b) Cricket
(c) Hockey (d) Kabaddi
15. mend : sewing :: edit : _____
(a) darn (b) Repair
(c) manuscript (d) makeshift

NSSNET-2023 – Sample Paper – INTELLIGENCE / REASONING

16. Fill in the blank.

rein : horse :: control panel : _____

- (a) Pilot (b) Bit
(c) Plane (d) Rider

17. Which letter replaces the question mark ?

E M H

N O A

I ? D

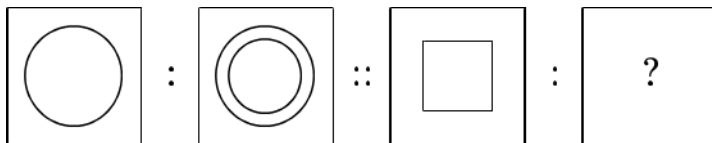
- (a) N (b) O
(c) P (d) M

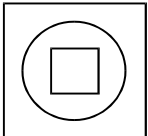
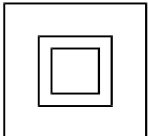
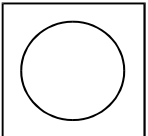
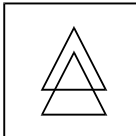
18. Choose the word that is a necessary part of the underlined word.

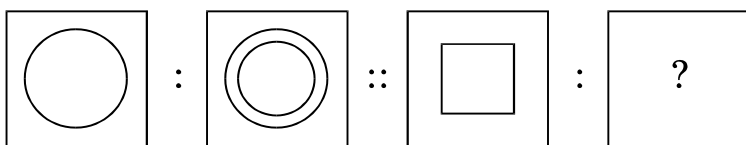
Guitar _____

- (a) Band (b) Teacher
(c) Songs (d) Strings

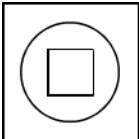
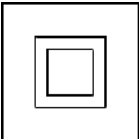
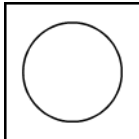
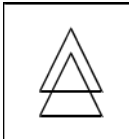
19.



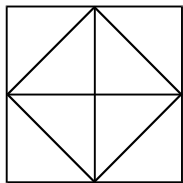
- (1)  (2)  (3)  (4) 



Complete the second pair by selecting the appropriate alternative.

- (a)  (b)  (c)  (d) 

20. How many triangles are there in the figure given below?



- (a) 4 (b) 12
(c) 16 (d) 10